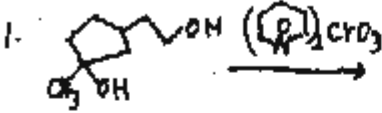
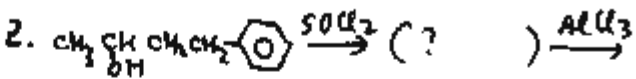

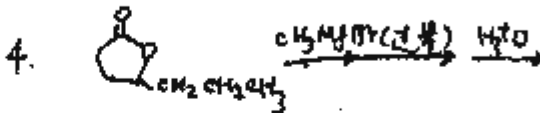
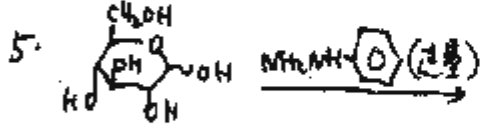
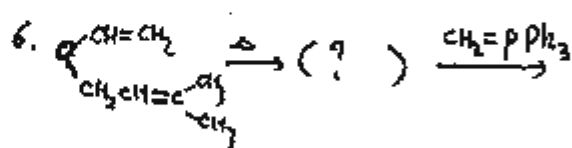
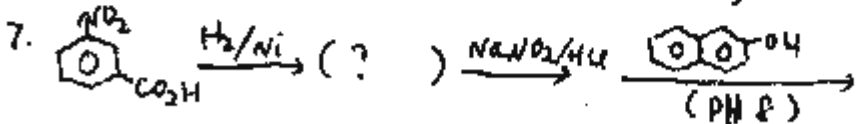

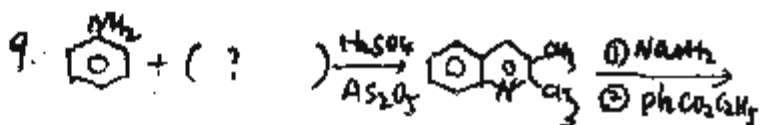

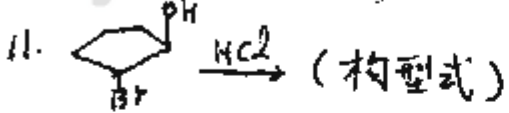
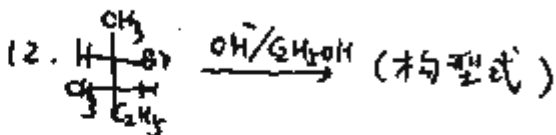

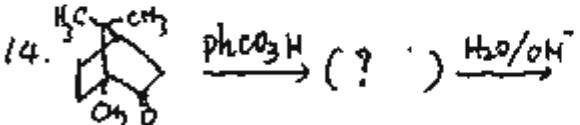
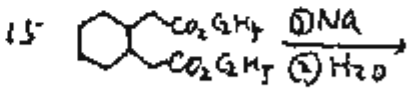


1999 年南开大学有机化学考研试题

考研加油站收集整理 <http://www.kaoyan.com>

一. 完成下列反应式: (25分)

1.  2. 
3.  4. 
5.  6. 
7.  8. 
9. 
10. 
11.  12. 
13. 
14.  15. 

二. 简要回答问题 (17分)

1. 下列 (1). (2). (3). (4) 四种化合物想用 A, B, C, D 对号表示, 根据以